




Her sırada kaç adet 'sanat malzemesi' olduğunu yan taraftaki rakam bölümünden işaretleyelim



1 2 3 4 5




1 2 3 4 5



1 2 3 4 5



1 2 3 4 5



1 2 3 4 5

Auntie
me